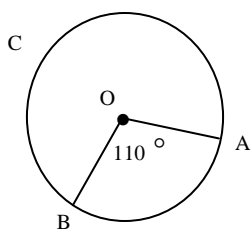


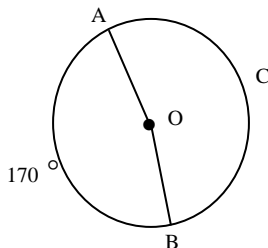
Given point O is the center of each circle:

1.



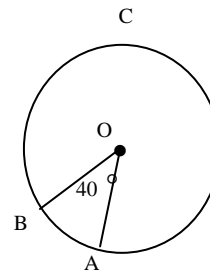
find $m \widehat{AB}$
 find $m \widehat{ACB}$

2.



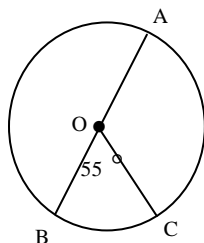
find $m \widehat{ACB}$
 find $m \angle AOB$

3.



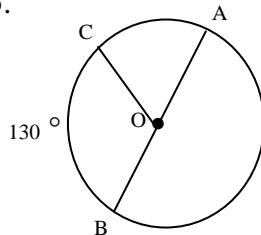
find $m \widehat{AB}$
 find $m \angle BCA$

4.



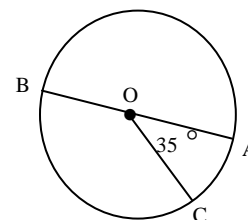
find $m \widehat{AC}$
 find $m \widehat{CBA}$

5.



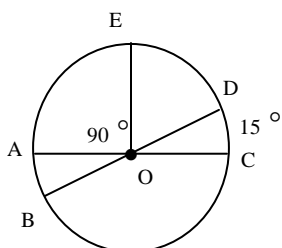
find $m \widehat{AOB}$
 find $m \angle COA$

6.



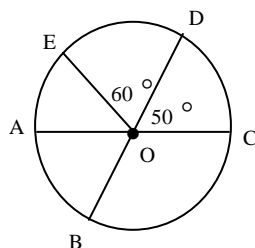
find $m \widehat{CAB}$
 find $m \widehat{ABC}$

7.



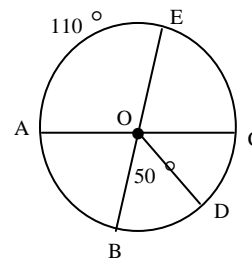
find $m \widehat{ED}$
 find $m \angle COB$
 find $m \widehat{AB}$
 find $m \angle BOE$

8.



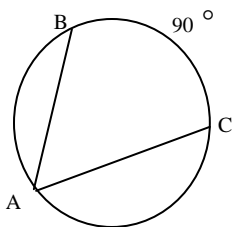
find $m \widehat{AE}$
 find $m \widehat{AB}$
 find $m \widehat{ECB}$
 find $m \angle BOC$

9.

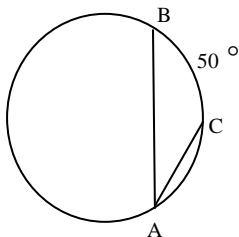


find $m \widehat{DC}$
 find $m \widehat{EAB}$
 find $m \widehat{ACB}$
 find $m \angle AOB$

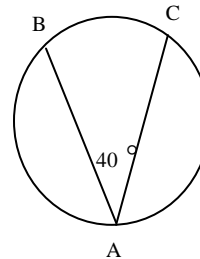
1. Find $m\angle A$



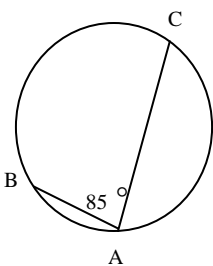
2. Find $m\angle A$



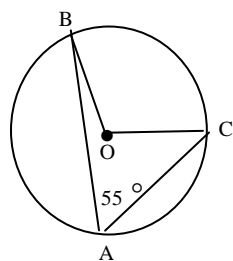
3. Find \widehat{BC}



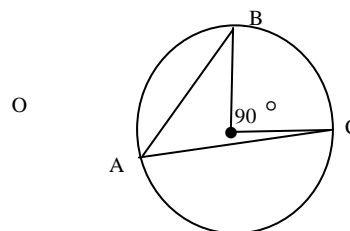
4. Find \widehat{BC}



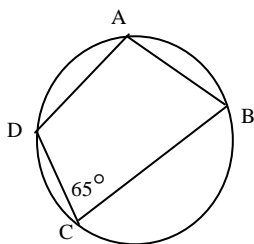
5. Find $m\angle BOC$



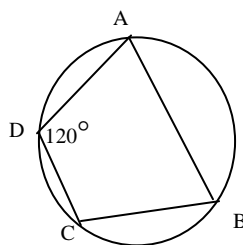
6. Find $m\angle A$



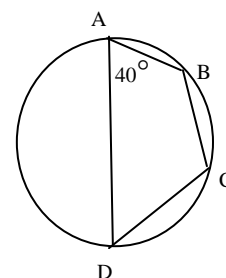
7. Find $m\angle A$



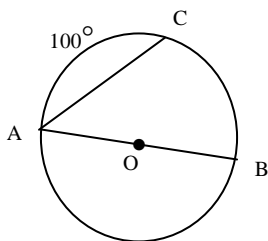
8. Find $m\angle B$



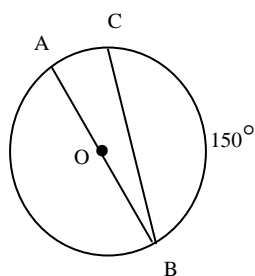
9. Find $m\angle C$



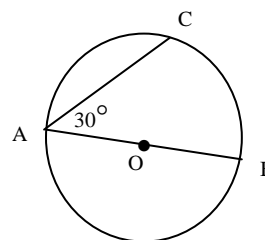
10. Find $m\angle A$



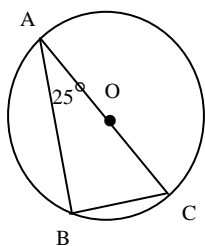
11. Find $m\angle B$



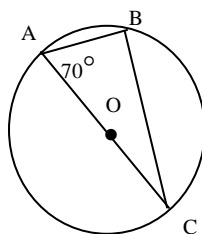
12. Find $m\angle AC$



13. Find $m\angle C$



14. Find $m\angle C$



15. Find $m\angle C$

