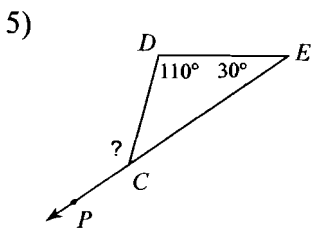
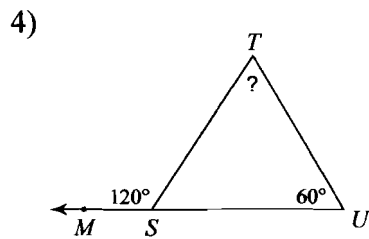
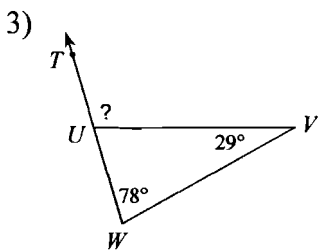
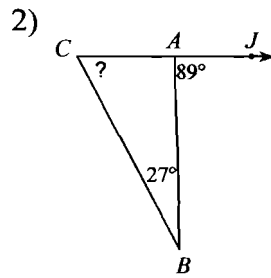
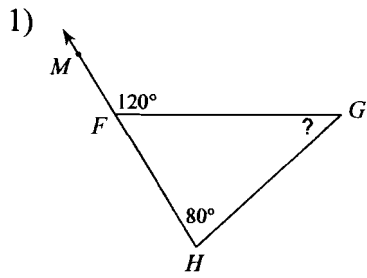


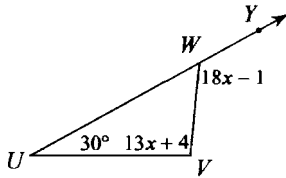
### Triangle - Interior & Exterior Angles

Find the measure of each angle indicated.

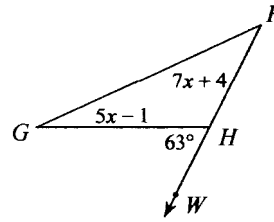


Solve for  $x$ .

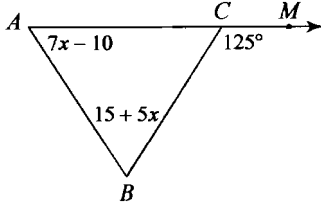
6)



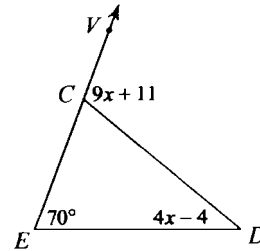
7)



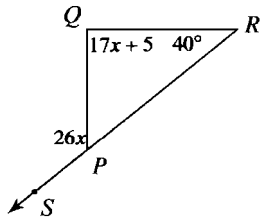
8)



9)



10)



## Answers to Triangle - Interior & Exterior Angles

- 1)  $40^\circ$
- 5)  $140^\circ$
- 9) 11

- 2)  $62^\circ$
- 6) 7
- 10) 5

- 3)  $107^\circ$
- 7) 5

- 4)  $60^\circ$
- 8) 10