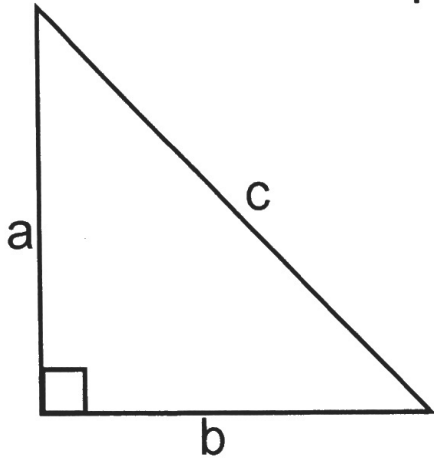


Warm Up - Unit 3

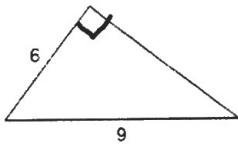
Pythagorean Theorem

$$a^2 + b^2 = c^2$$

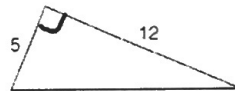


Find each missing side length.

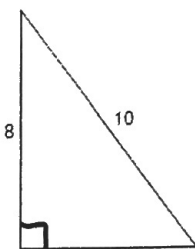
1)



2)



3)



4)

