

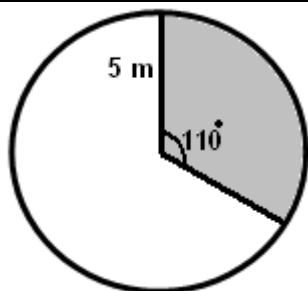
Student Name: _____

Score: _____

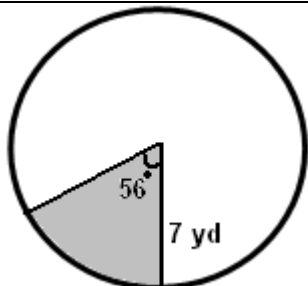
Area of Sector Worksheet

Find the area of each sector. Round your answers to the nearest hundredth:

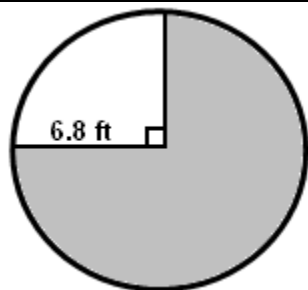
Work Space



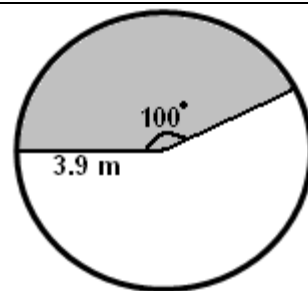
Area of sector= _____



Area of sector= _____



Area of sector= _____

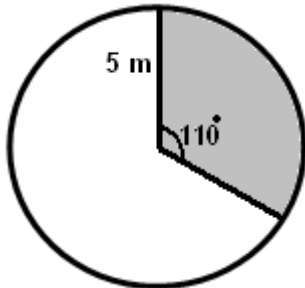


Area of sector= _____

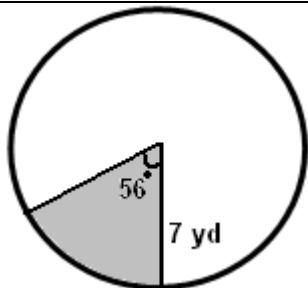
Student Name: _____

Score: _____

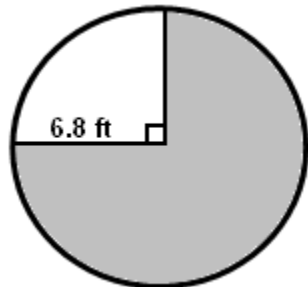
Answers



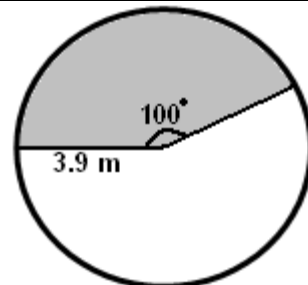
Area of sector= 24.00 m^2



Area of sector= 23.95 yd^2



Area of sector= 108.95 ft^2



Area of sector= 13.27 m^2